

O. P. JINDAL SCHOOL, SAVITRI NAGAR
Second Assessment (2022 - 2023)

Class / Section: KG- II (A/B)
Subject: EVS

MM: 20
Time: 1Hr

Name: _____

Roll No.: _____

Date: _____



Invigilator Sign: _____

Marks Obtained: _____

Examiner Sign: _____

Q.I Circle (o) the activities that need water.

($\frac{1}{2} \times 6 = 3$ Marks)

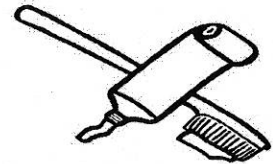
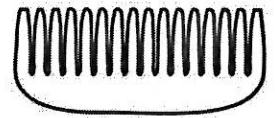


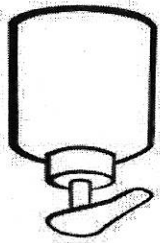


Q.II Fill the missing letters to complete the word.

($\frac{1}{2} \times 4 = 2$ Marks)


S		N	D		Y
---	--	---	---	--	---

F	R		D	A	
---	---	--	---	---	--



(1/2 x 6 = 3 Marks)




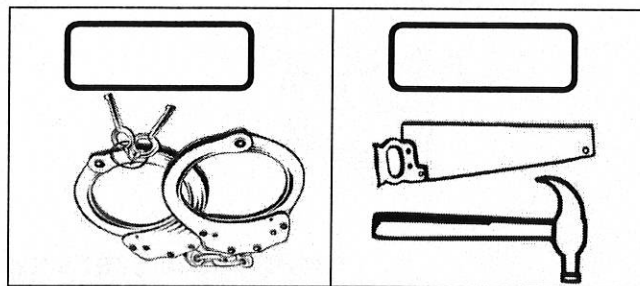
Q.V Colour the objects that help us to keep our body clean.



Please	Thank-you	Sorry
--------	-----------	-------

(1 x 3 = 3 Marks)

Q.IV Write the correct answer in the box given below the picture.







(1 x 2 = 2 Marks)

Q.III Put a tick (✓) below the correct objects .

Q.VI Match the following.

(1x3=3 Marks)



Q.VII Write opposites of the given words.

($\frac{1}{2} \times 4 = 2$ Marks)

Go	Slow	Fat	Down
----	------	-----	------

- Fast x _____
- Up x _____
- Come x _____
- Thin x _____

Q.VIII Colour the water resources.

(1x2=2 Marks)

